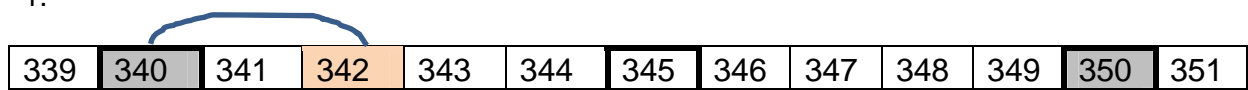


Runden auf **Zehner!** Runde ab \Leftarrow oder runde auf \Rightarrow !

 Zeichne die **Pfeile!**  Trage die fehlenden Zahlen ein!

1.



342	≈	340
-----	---	-----

2.



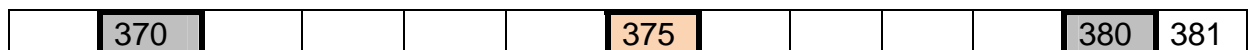
354	≈	
-----	---	--

3.



367	≈	
-----	---	--

4.



375	≈	
-----	---	--

5.



389	≈	
-----	---	--

6.



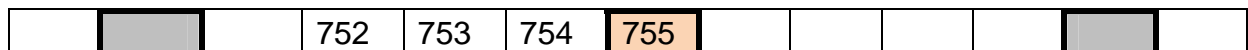
222	≈	
-----	---	--

7.



446	≈	
-----	---	--

8.



755	≈	
-----	---	--

9.



$$838 \approx \square$$

10.



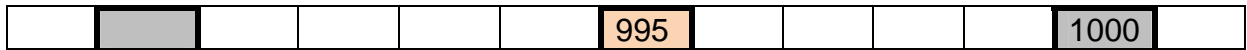
$$913 \approx \square$$

11.



$$607 \approx \square$$

12.



$$995 \approx \square$$

13.



$$392 \approx \square$$

14.



$$208 \approx \square$$

✿ 15.



$$197 \approx \square$$

✿ 16.



$$897 \approx \square$$

✿ 17.



$$304 \approx \square$$