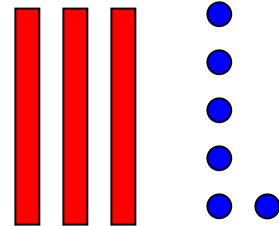


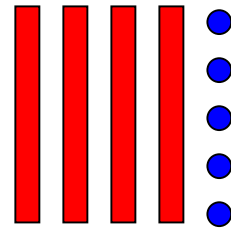

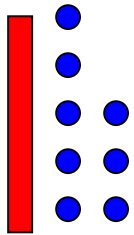


Wie heißt die Zahl?

Name: _____



Wie viele Zehner?

Wie viele Einer?

Z	E
57	

Z	E
24	

Z	E
38	

Z	E
5	

Z	E
75	

Z	E
42	

Z	E
83	

Schreibe die Zahl!

Schau genau!!



4Z	1E
<input type="text"/>	

9Z	4E
<input type="text"/>	

5Z	2E
<input type="text"/>	

1Z	5E
<input type="text"/>	

8E	3Z
<input type="text"/>	

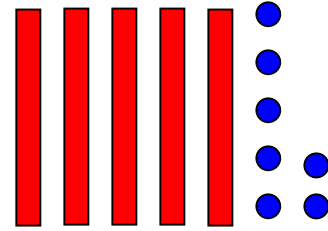


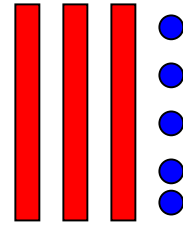

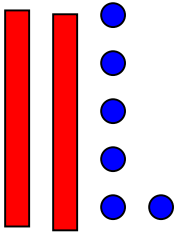
5Z	7E
<input type="text"/>	

6E	2Z
<input type="text"/>	



Wie heißt die Zahl?

Name: _____



Wie viele Zehner?

Wie viele Einer?

Z	E
27	

Z	E
54	

Z	E
18	

Z	E
4	

Z	E
65	

Z	E
47	

Z	E
93	

Schreibe die Zahl!

Schau genau!!



9Z	1E
<input type="text"/>	

3Z	4E
<input type="text"/>	

6Z	2E
<input type="text"/>	

1Z	7E
<input type="text"/>	

5E	3Z
<input type="text"/>	

7Z	9E
<input type="text"/>	

8E	2Z
<input type="text"/>	