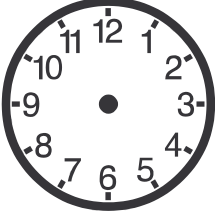



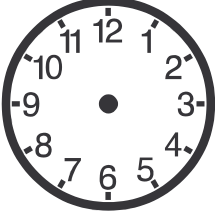











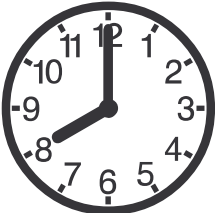
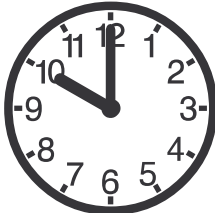
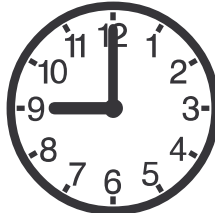



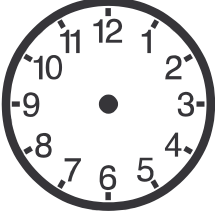



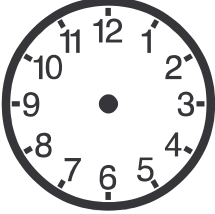











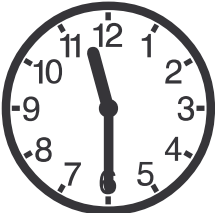



Name: _____

Wie spät ist es?

 <p>7 Uhr</p>	 <p>8 Uhr</p>	 <p>10 Uhr</p>	 <p>1 Uhr</p>
 <p>3 Uhr</p>	 <p>6 Uhr</p>	 <p>12 Uhr</p>	 <p>5 Uhr</p>
 <p>2 Uhr</p>	 <p>12 Uhr</p>	 <p>4 Uhr</p>	 <p>1 Uhr</p>
 <p>4 Uhr</p>	 <p>3 Uhr</p>	 <p>12 Uhr</p>	 <p>11 Uhr</p>
 <p>8 Uhr</p>	 <p>10 Uhr</p>	 <p>9 Uhr</p>	 <p>7 Uhr</p>

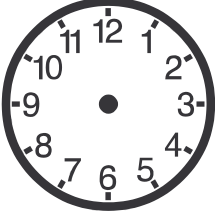



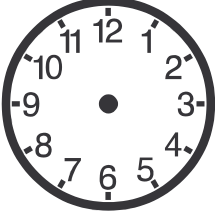














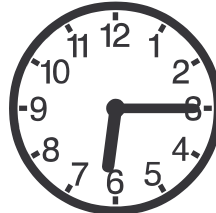
Name: _____

Wie spät ist es?

 <p>halb 7 Uhr</p>	 <p>halb 8 Uhr</p>	 <p>halb 10 Uhr</p>	 <p>halb 1 Uhr</p>
 <p>halb 3 Uhr</p>	 <p>halb 6 Uhr</p>	 <p>halb 12 Uhr</p>	 <p>halb 5 Uhr</p>
 <p></p>	 <p></p>	 <p></p>	 <p></p>
 <p></p>	 <p></p>	 <p></p>	 <p></p>
 <p></p>	 <p></p>	 <p></p>	 <p></p>

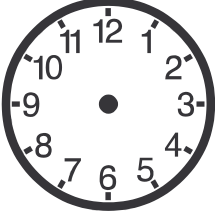



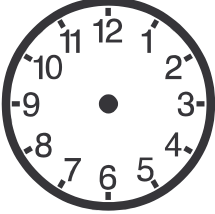











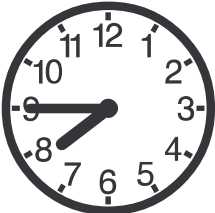
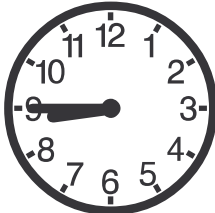


Name: _____

Wie spät ist es?

 <p>viertel 7 Uhr</p>	 <p>viertel 8 Uhr</p>	 <p>viertel 10 Uhr</p>	 <p>viertel 1 Uhr</p>
 <p>viertel 3 Uhr</p>	 <p>viertel 6 Uhr</p>	 <p>viertel 12 Uhr</p>	 <p>viertel 5 Uhr</p>
 <p></p>	 <p></p>	 <p></p>	 <p></p>
 <p></p>	 <p></p>	 <p></p>	 <p></p>
 <p></p>	 <p></p>	 <p></p>	 <p></p>

Name: _____

Wie spät ist es?

 <p>drei viertel 7 Uhr</p>	 <p>drei viertel 8 Uhr</p>	 <p>drei viertel 10 Uhr</p>	 <p>drei viertel 1 Uhr</p>
 <p>drei viertel 3 Uhr</p>	 <p>drei viertel 6 Uhr</p>	 <p>drei viertel 12 Uhr</p>	 <p>drei viertel 5 Uhr</p>
 <p></p>	 <p></p>	 <p></p>	 <p></p>
 <p></p>	 <p></p>	 <p></p>	 <p></p>
 <p></p>	 <p></p>	 <p></p>	 <p></p>