

Name: _____

Wandle in cm um!

$2 \text{ dm} = \underline{\hspace{2cm}}$

$6 \text{ dm} = \underline{\hspace{2cm}}$

$5 \text{ dm} = \underline{\hspace{2cm}}$

$9 \text{ dm} = \underline{\hspace{2cm}}$

$7 \text{ dm} = \underline{\hspace{2cm}}$

$3 \text{ dm} = \underline{\hspace{2cm}}$

$8 \text{ dm} = \underline{\hspace{2cm}}$

$4 \text{ dm} = \underline{\hspace{2cm}}$

Wandle in dm um!

$70 \text{ cm} = \underline{\hspace{2cm}}$

$30 \text{ cm} = \underline{\hspace{2cm}}$

$90 \text{ cm} = \underline{\hspace{2cm}}$

$60 \text{ cm} = \underline{\hspace{2cm}}$

$20 \text{ cm} = \underline{\hspace{2cm}}$

$40 \text{ cm} = \underline{\hspace{2cm}}$

$100 \text{ cm} = \underline{\hspace{2cm}}$



Wandle in cm um!

$3 \text{ dm } 5 \text{ cm} = \underline{\hspace{2cm}} \text{ cm}$

$5 \text{ dm } 2 \text{ cm} = \underline{\hspace{2cm}} \text{ cm}$

$6 \text{ dm } 3 \text{ cm} = \underline{\hspace{2cm}} \text{ cm}$

$9 \text{ dm } 1 \text{ cm} = \underline{\hspace{2cm}} \text{ cm}$

$8 \text{ dm } 7 \text{ cm} = \underline{\hspace{2cm}} \text{ cm}$

$5 \text{ dm } 7 \text{ cm} = \underline{\hspace{2cm}} \text{ cm}$

$8 \text{ dm } 1 \text{ cm} = \underline{\hspace{2cm}} \text{ cm}$

$6 \text{ dm } 9 \text{ cm} = \underline{\hspace{2cm}} \text{ cm}$

$4 \text{ dm } 3 \text{ cm} = \underline{\hspace{2cm}} \text{ cm}$

$2 \text{ dm } 9 \text{ cm} = \underline{\hspace{2cm}} \text{ cm}$

$1 \text{ dm } 8 \text{ cm} = \underline{\hspace{2cm}} \text{ cm}$

$6 \text{ dm } 8 \text{ cm} = \underline{\hspace{2cm}} \text{ cm}$

$4 \text{ dm } 7 \text{ cm} = \underline{\hspace{2cm}} \text{ cm}$

$5 \text{ dm } 8 \text{ cm} = \underline{\hspace{2cm}} \text{ cm}$

$9 \text{ dm } 3 \text{ cm} = \underline{\hspace{2cm}} \text{ cm}$

$7 \text{ dm } 4 \text{ cm} = \underline{\hspace{2cm}} \text{ cm}$

$6 \text{ dm } 3 \text{ cm} = \underline{\hspace{2cm}} \text{ cm}$

$2 \text{ dm } 5 \text{ cm} = \underline{\hspace{2cm}} \text{ cm}$

Wandle in dm und cm um!

$54 \text{ cm} = \underline{\hspace{1cm}} \text{ dm } \underline{\hspace{1cm}} \text{ cm}$

$37 \text{ cm} = \underline{\hspace{1cm}} \text{ dm } \underline{\hspace{1cm}} \text{ cm}$

$89 \text{ cm} = \underline{\hspace{1cm}} \text{ dm } \underline{\hspace{1cm}} \text{ cm}$

$23 \text{ cm} = \underline{\hspace{1cm}} \text{ dm } \underline{\hspace{1cm}} \text{ cm}$

$76 \text{ cm} = \underline{\hspace{1cm}} \text{ dm } \underline{\hspace{1cm}} \text{ cm}$

$35 \text{ cm} = \underline{\hspace{1cm}} \text{ dm } \underline{\hspace{1cm}} \text{ cm}$

$82 \text{ cm} = \underline{\hspace{1cm}} \text{ dm } \underline{\hspace{1cm}} \text{ cm}$

$16 \text{ cm} = \underline{\hspace{1cm}} \text{ dm } \underline{\hspace{1cm}} \text{ cm}$

$52 \text{ cm} = \underline{\hspace{1cm}} \text{ dm } \underline{\hspace{1cm}} \text{ cm}$

$49 \text{ cm} = \underline{\hspace{1cm}} \text{ dm } \underline{\hspace{1cm}} \text{ cm}$

$82 \text{ cm} = \underline{\hspace{1cm}} \text{ dm } \underline{\hspace{1cm}} \text{ cm}$

$16 \text{ cm} = \underline{\hspace{1cm}} \text{ dm } \underline{\hspace{1cm}} \text{ cm}$

$38 \text{ cm} = \underline{\hspace{1cm}} \text{ dm } \underline{\hspace{1cm}} \text{ cm}$

$27 \text{ cm} = \underline{\hspace{1cm}} \text{ dm } \underline{\hspace{1cm}} \text{ cm}$

$64 \text{ cm} = \underline{\hspace{1cm}} \text{ dm } \underline{\hspace{1cm}} \text{ cm}$

$59 \text{ cm} = \underline{\hspace{1cm}} \text{ dm } \underline{\hspace{1cm}} \text{ cm}$

$21 \text{ cm} = \underline{\hspace{1cm}} \text{ dm } \underline{\hspace{1cm}} \text{ cm}$

$11 \text{ cm} = \underline{\hspace{1cm}} \text{ dm } \underline{\hspace{1cm}} \text{ cm}$



Name: _____

Wandle in cm um!

3 m = _____ 5 m = _____

7 m = _____ 8 m = _____

4 m = _____ 2 m = _____

9 m = _____ 6 m = _____

Wandle in m um!

500 cm = _____ 800 cm = _____

200 cm = _____ 600 cm = _____

700 cm = _____ 400 cm = _____

300 cm = _____ 900 cm = _____

Wandle in cm um!

6 m 37 cm = _____ cm

4 m 09 cm = _____ cm

3 m 87 cm = _____ cm

7 m 43 cm = _____ cm

2 m 98 cm = _____ cm

5 m 42 cm = _____ cm

9 m 17 cm = _____ cm

8 m 04 cm = _____ cm

3 m 56 cm = _____ cm

2 m 08 cm = _____ cm

5 m 17 cm = _____ cm

Wandle in m und cm um!

598 cm = _____ m _____ cm

699 cm = _____

437 cm = _____

454 cm = _____

769 cm = _____

328 cm = _____

616 cm = _____

879 cm = _____

222 cm = _____

106 cm = _____

549 cm = _____

Wandle in dm um!

1 m = _____ 6 m = _____

5 m = _____ 9 m = _____

8 m = _____ 4 m = _____

3 m = _____ 7 m = _____

Wandle in m und dm um!


19 dm = _____ m _____ dm

87 dm = _____

26 dm = _____

73 dm = _____

Name: _____



Wandle in **mm** um!

3 cm = _____ 5 cm = _____

7 cm = _____ 8 cm = _____

4 cm = _____ 2 cm = _____

9 cm = _____ 6 cm = _____

Wandle in **cm** um!

500 mm = _____ 800 mm = _____

200 mm = _____ 600 mm = _____

700 mm = _____ 400 mm = _____

300 mm = _____ 900 mm = _____

Wandle in **mm** um!

5 cm 3 mm = _____ mm

3 cm 2 mm = _____ mm

6 cm 7 mm = _____ mm

2 cm 9 mm = _____ mm

7 cm 3 mm = _____ mm

9 cm 1 mm = _____ mm

8 cm 5 mm = _____ mm

3 cm 7 mm = _____ mm

2 cm 1 mm = _____ mm

6 cm 4 mm = _____ mm

1 cm 9 mm = _____ mm

Wandle in **cm** und **mm** um!

56 mm = _____ cm _____ mm

32 mm = _____ cm _____ mm

69 mm = _____ cm _____ mm

84 mm = _____ cm _____ mm

91 mm = _____ cm _____ mm

53 mm = _____ cm _____ mm

29 mm = _____ cm _____ mm

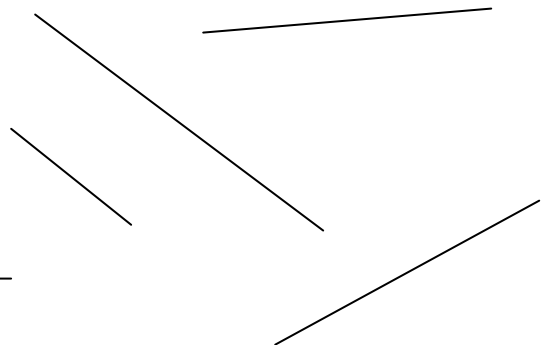

51 mm = _____ cm _____ mm

83 mm = _____ cm _____ mm

45 mm = _____ cm _____ mm

62 mm = _____ cm _____ mm

Miss auf den **mm** genau ab!



Zeichne folgende Strecken!

a = 12 mm

d = 3 cm 2 mm

b = 37 mm

e = 2 cm 9 mm

c = 56 mm

f = 6 cm 2 mm