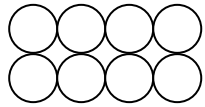


Malreihe von 4

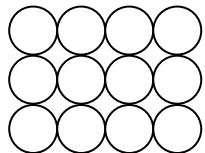
➤ Male die Perlen der 4er Reihe **gelb** an!



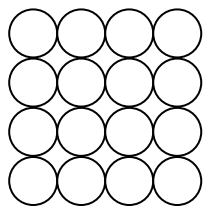
$1 \cdot 4 = \underline{\quad}$




$2 \cdot 4 = \underline{\quad}$



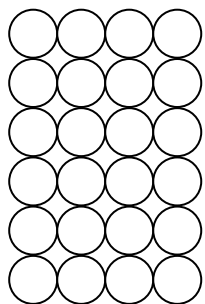
$3 \cdot 4 = \underline{\quad}$




$4 \cdot 4 = \underline{\quad}$



$5 \cdot 4 = \underline{\quad}$




$6 \cdot 4 = \underline{\quad}$




$7 \cdot 4 = \underline{\quad}$


Malreihe von 4



$$8 \cdot 4 = \underline{\quad}$$



$$9 \cdot 4 = \underline{\quad}$$



$$10 \cdot 4 = \underline{\quad}$$