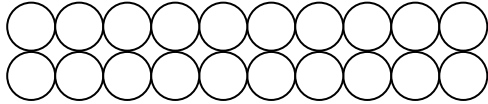


# Malreihe von 10

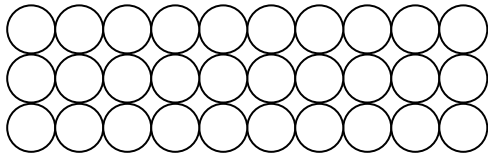
➤ Male die Perlen der 10er Reihe **gold** an!



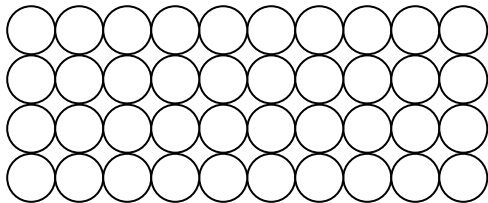
$1 \cdot 10 = \underline{\quad}$



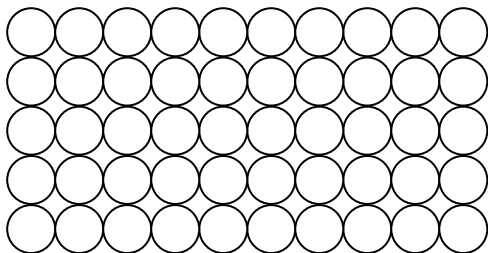
$2 \cdot 10 = \underline{\quad}$




$3 \cdot 10 = \underline{\quad}$




$4 \cdot 10 = \underline{\quad}$



$5 \cdot 10 = \underline{\quad}$




$6 \cdot 10 = \underline{\quad}$

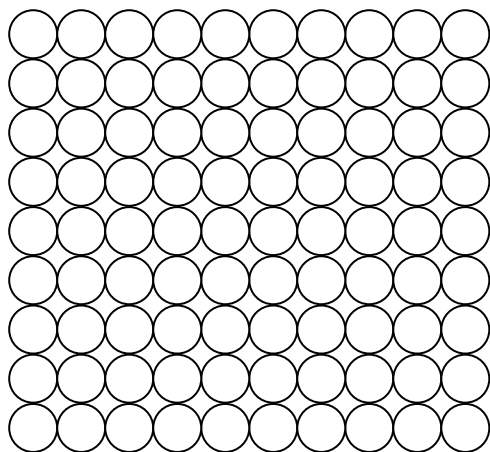


$7 \cdot 10 = \underline{\quad}$


## Malreihe von 10



$$8 \cdot 10 = \underline{\quad}$$



$$9 \cdot 10 = \underline{\quad}$$



$$10 \cdot 10 = \underline{\quad}$$