



Rechne die Malsätzchen richtig aus!

1.5




$9.5 =$

45




$3.5 =$

50




$7.5 =$

25



$1.5 =$

10




$5.5 =$

20




$8.5 =$

30




$2.5 =$

5



$10.5 =$

40



$4.5 =$

15



$6.5 =$

35

Lösung

