



Rechne die Malsätzchen richtig aus!


1.10

  $4 \cdot 10 =$


20

  $8 \cdot 10 =$


50

  $1 \cdot 10 =$

10

  $5 \cdot 10 =$


60

  $9 \cdot 10 =$

30

  $10 \cdot 10 =$


90

  $2 \cdot 10 =$


40

  $3 \cdot 10 =$

70

  $7 \cdot 10 =$

100

  $6 \cdot 10 =$

80

# Lösung

