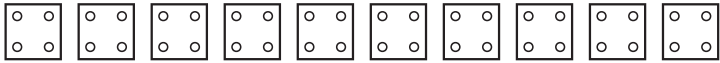
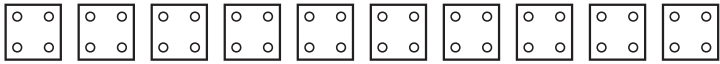


4-er Reihe

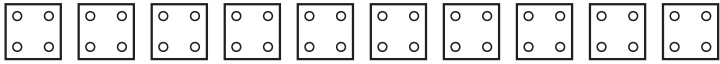
Male die Würfel an!

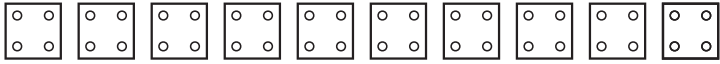


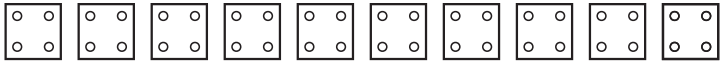
$1 \cdot 4 = 4$

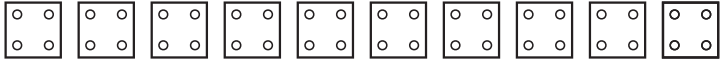


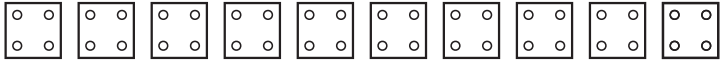
$2 \cdot 4 = \underline{\quad}$

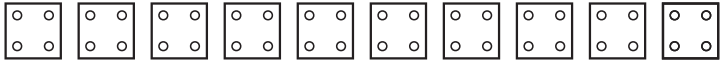


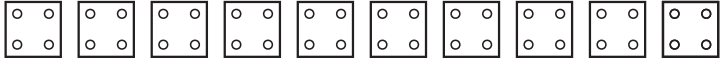


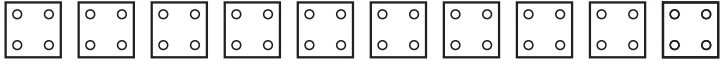







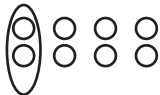







teilen


 $4 : 4 = 1$


 $8 : 4 = 2$


 $12 : 4 =$


 $16 : 4 =$


 $20 : 4 =$

 $24 : 4 =$

 $28 : 4 =$

 $32 : 4 =$

 $36 : 4 =$

 $40 : 4 =$

messen


 $4 \text{ in } 4 = 1 \text{ x}$


 $4 \text{ in } 8 = 2 \text{ x}$


 $4 \text{ in } 12 =$


 $4 \text{ in } 16 =$


 $4 \text{ in } 20 =$

 $4 \text{ in } 24 =$

 $4 \text{ in } 28 =$

 $4 \text{ in } 32 =$

 $4 \text{ in } 36 =$

 $4 \text{ in } 40 =$