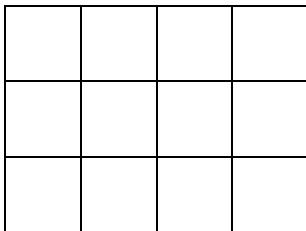


Die Fläche :

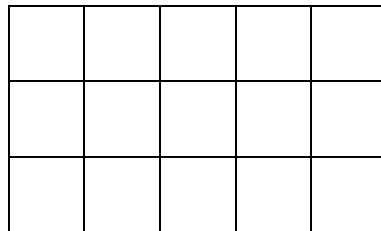
Berechne den Flächeninhalt !

Länge: 4 cm



Breite: 3cm

Länge: _____



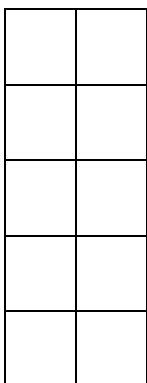
Breite: _____

Länge mal Breite:

$4 \cdot 3 = 12 \text{ cm}^2$

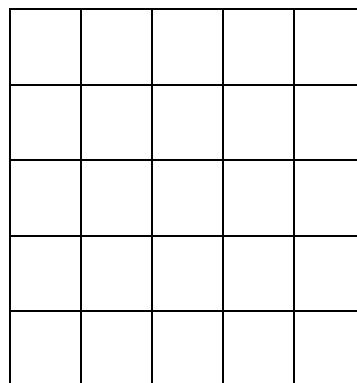
Länge mal Breite:

Länge: _____



Breite: _____

Länge: _____



Breite: _____

Länge mal Breite:

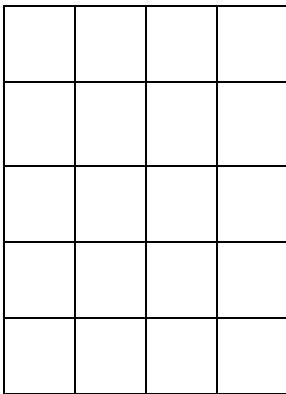
Länge mal Breite:

Flächeninhalt berechnen :

$$\text{Fläche} = \text{Länge mal Breite}$$

$$A = l \cdot b$$

l: _____



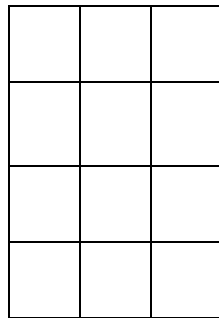
b: _____

Fläche: Länge mal Breite

$$A = l \cdot b$$

$$A = \underline{\hspace{2cm}}$$

b: _____



l: _____

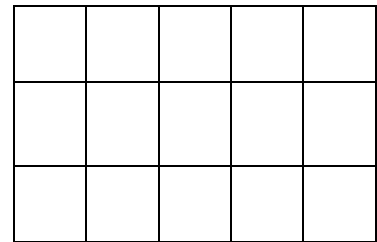
Fläche: Länge · Breite

$$A = l \cdot b$$

$$A = \underline{\hspace{2cm}}$$

l: _____

b: _____

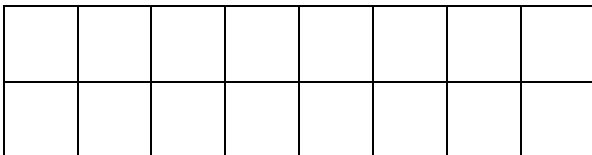


Fläche: Länge · Breite

$$A = l \cdot b$$

$$A = \underline{\hspace{2cm}}$$

l: _____



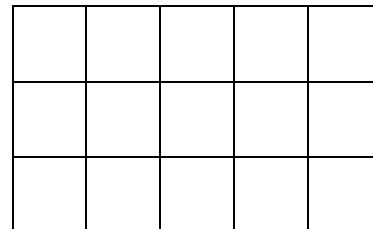
b: _____

Fläche: Länge mal Breite

$$A = l \cdot b = \underline{\hspace{2cm}}$$

$$A = \underline{\hspace{2cm}}$$

l: _____



b: _____

Fläche: Länge mal Breite

$$A = l \cdot b$$

$$A = \underline{\hspace{2cm}}$$