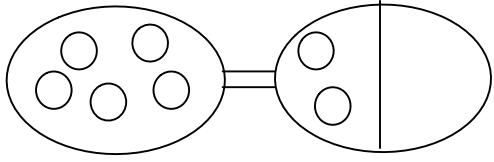
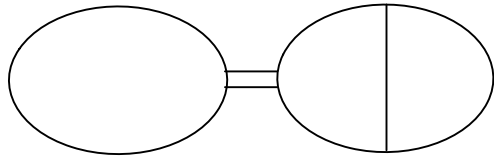


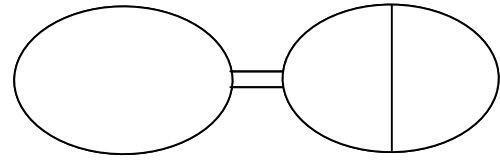
Name: _____



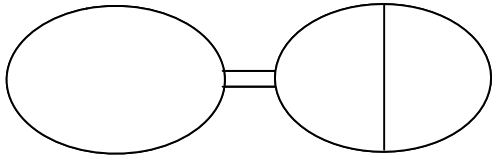
$$5 = 2 + \square$$



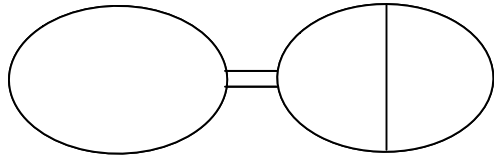
$$5 = 4 + \square$$



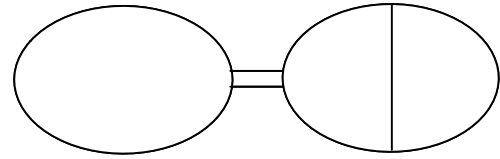
$$5 = 3 + \square$$



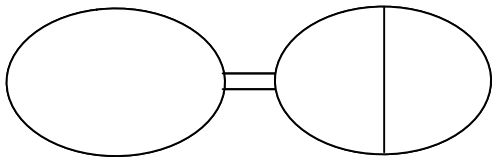
$$5 = 5 + \square$$



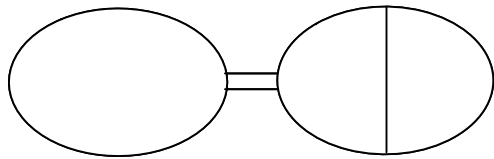
$$5 = 1 + \square$$



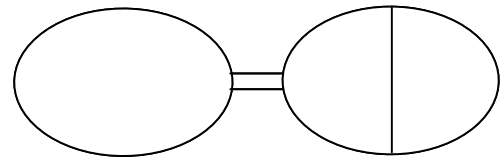
$$5 = 0 + \square$$



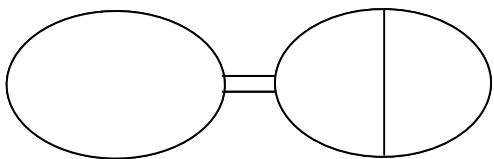
$$4 = 2 + \square$$



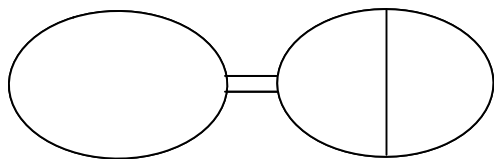
$$4 = 1 + \square$$



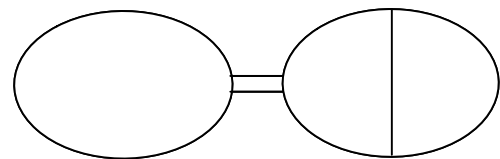
$$4 = 0 + \square$$



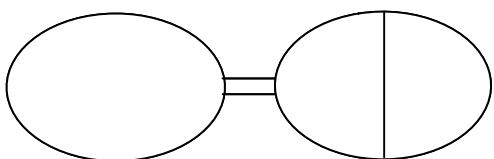
$$4 = 3 + \square$$



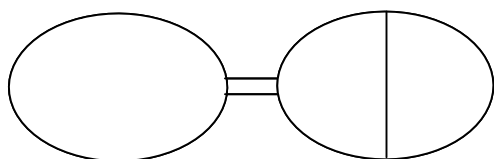
$$4 = 4 + \square$$



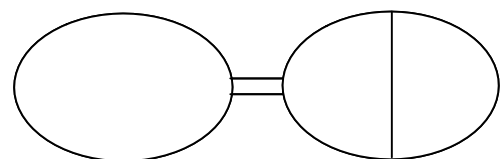
$$3 = 0 + \square$$



$$3 = 2 + \square$$



$$3 = 3 + \square$$



$$3 = 1 + \square$$