



Name: _____

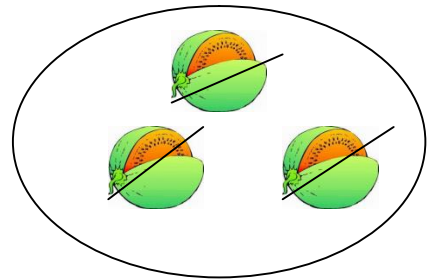
Wegnehmen




$5 - 2 = \underline{\quad}$




$4 - 2 = \underline{\quad}$



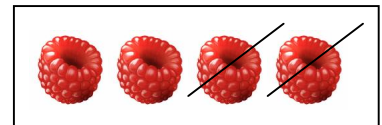
$3 - 3 = \underline{\quad}$




$5 - 2 = \underline{\quad}$



$2 - 0 = \underline{\quad}$



$4 - 2 = \underline{\quad}$



$\underline{\quad} - \underline{\quad} = \underline{\quad}$



$\underline{\quad} - \underline{\quad} = \underline{\quad}$



$\underline{\quad} - \underline{\quad} = \underline{\quad}$



$5 - 1 = \underline{\quad}$

$4 - 1 = \underline{\quad}$

$5 - 4 = \underline{\quad}$

$4 - 2 = \underline{\quad}$

$3 - 2 = \underline{\quad}$

$4 - 3 = \underline{\quad}$

$3 - 3 = \underline{\quad}$

$5 - 3 = \underline{\quad}$

$2 - 1 = \underline{\quad}$