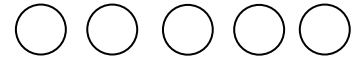
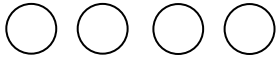


4. Wie viel ist das?
Plusrechnungen

1



Male an und rechne!



$2 + 2 = \underline{\quad}$

$3 + 2 = \underline{\quad}$


$4 + 1 = \underline{\quad}$



$2 + 0 = \underline{\quad}$

$1 + 2 = \underline{\quad}$

$2 + 3 = \underline{\quad}$



$3 + 0 = \underline{\quad}$

$3 + 1 = \underline{\quad}$

$4 + 0 = \underline{\quad}$

4. Wie viel ist das?
Plusrechnungen

2

Rechne.

$1 + 4 = \boxed{\quad}$

$5 + 0 = \boxed{\quad}$

$3 + 1 = \boxed{\quad}$

$4 + 1 = \boxed{\quad}$

$2 + 2 = \boxed{\quad}$

$4 + 0 = \boxed{\quad}$

$1 + 2 = \boxed{\quad}$

$3 + 2 = \boxed{\quad}$

$1 + 3 = \boxed{\quad}$

$0 + 1 = \boxed{\quad}$

$2 + 0 = \boxed{\quad}$

$2 + 1 = \boxed{\quad}$

4. Wie viel ist das?
Plusrechnungen

3

Schreibe die Rechnung auf!

