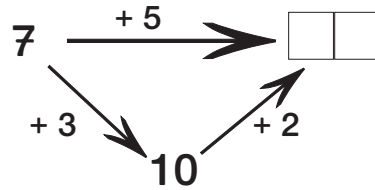
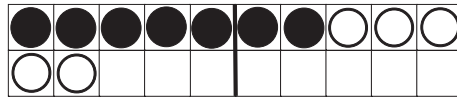


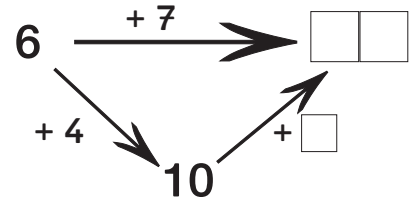
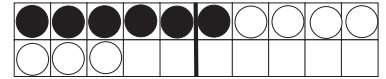
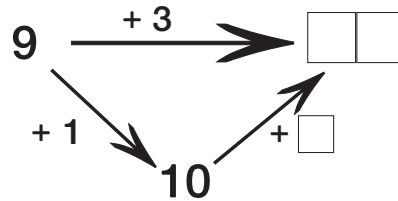
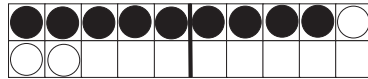
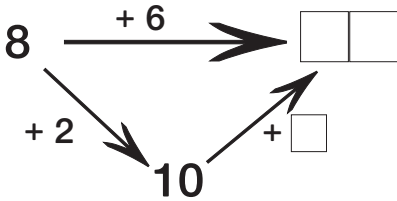
Rechnen über den Zehner

Name: _____

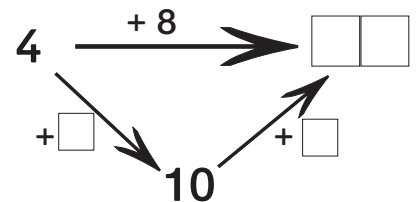
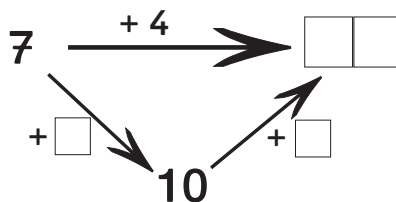
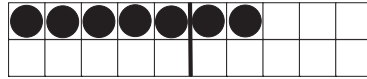
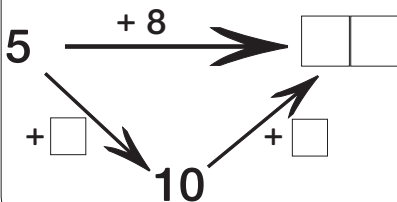
1



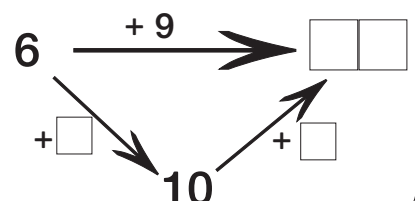
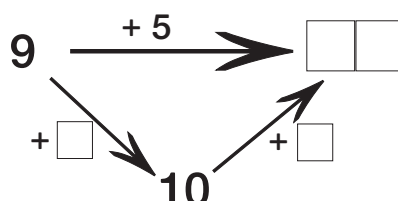
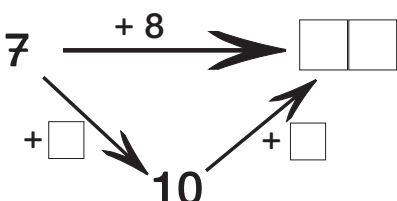
2



3



4



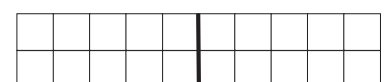
5



$6 + 8 =$



$5 + 6 =$

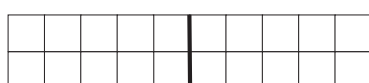


$9 + 4 =$

6



$8 + 3 =$



$7 + 5 =$



$2 + 9 =$

7

$6 + 5 =$

$9 + 8 =$

$7 + 6 =$

$4 + 7 =$

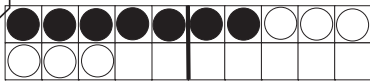
$3 + 9 =$

$8 + 8 =$

Rechnen über den Zehner 2

Name: _____

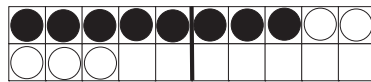
1



$$7 + 6 = \square \square$$

$$7 + 3 = 10$$

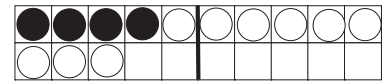
$$10 + 3 = \square \square$$



$$8 + 5 = \square \square$$

$$8 + 2 = 10$$

$$10 + 3 = \square \square$$



$$4 + 9 = \square \square$$

$$4 + 6 = 10$$

$$10 + 3 = \square \square$$

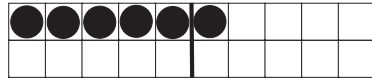
2



$$5 + 7 = \square \square$$

$$5 + \square = 10$$

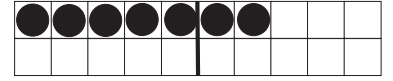
$$10 + \square = \square \square$$



$$6 + 5 = \square \square$$

$$6 + \square = 10$$

$$10 + \square = \square \square$$



$$7 + 8 = \square \square$$

$$7 + \square = 10$$

$$10 + \square = \square \square$$

3



$$6 + 8 = \square \square$$

$$6 + \square = 10$$

$$10 + \square = \square \square$$



$$7 + 5 = \square \square$$

$$7 + \square = 10$$

$$10 + \square = \square \square$$

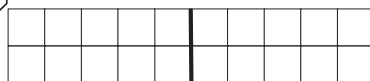


$$3 + 9 = \square \square$$

$$3 + \square = 10$$

$$10 + \square = \square \square$$

4



$$6 + 6 = \square \square$$



$$7 + 7 = \square \square$$



$$8 + 8 = \square \square$$

5



$$8 + 7 = \square \square$$



$$9 + 8 = \square \square$$



$$6 + 9 = \square \square$$


6



$$4 + 8 = \square \square$$



$$5 + 8 = \square \square$$



$$3 + 8 = \square \square$$

* 7

$$5 + 5 = \square \square$$

$$9 + 9 = \square \square$$

$$7 + 6 = \square \square$$

$$6 + 5 = \square \square$$

$$8 + 9 = \square \square$$

$$8 + 6 = \square \square$$

$$7 + 5 = \square \square$$

$$7 + 9 = \square \square$$

$$9 + 6 = \square \square$$