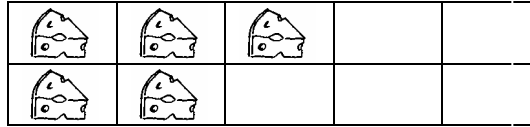





Wie viele Käsestücke fehlen


Male den Käse gelb an!



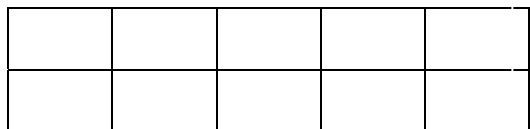
$15 + \underline{\quad} = 20$



$14 + \underline{\quad} = 20$




$11 + \underline{\quad} = 20$



$10 + \underline{\quad} = 20$



$19 + \underline{\quad} = 20$



$12 + \underline{\quad} = 20$



$17 + \underline{\quad} = 20$

Ergänze immer auf 20!

$10 + \underline{\quad} = 20$

$18 + \underline{\quad} = 20$

$13 + \underline{\quad} = 20$

$11 + \underline{\quad} = 20$

$12 + \underline{\quad} = 20$

$19 + \underline{\quad} = 20$

$15 + \underline{\quad} = 20$

$17 + \underline{\quad} = 20$

$16 + \underline{\quad} = 20$