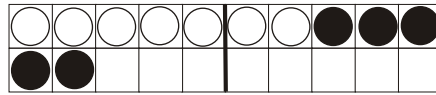


# Umkehraufgaben

Name: \_\_\_\_\_

1.



$$\square + 5 = 12$$

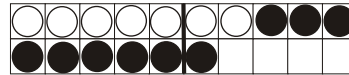
$$12 - 5 = \square$$

2.



$$\square + 6 = 14$$

$$14 - 6 = \square$$



$$\square + 9 = 16$$

$$16 - 9 = \square$$



$$\square + 4 = 13$$

$$13 - 4 = \square$$

3.

$$\square + 7 = 15$$

$$15 - 7 = \square$$

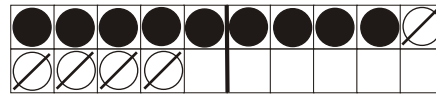
$$\square + 3 = 12$$

$$12 - 3 = \square$$

$$\square + 8 = 13$$

$$13 - 8 = \square$$

4.



$$\square - 5 = 9$$

$$9 + 5 = \square$$

5.



$$\square - 9 = 8$$

$$8 + 9 = \square$$



$$\square - 7 = 7$$

$$7 + 7 = \square$$



$$\square - 6 = 5$$

$$5 + 6 = \square$$

6.

$$\square - 7 = 9$$

$$9 + 7 = \square$$

$$\square - 8 = 5$$

$$5 + 8 = \square$$

$$\square - 4 = 7$$

$$7 + 4 = \square$$

7.

$$\square - 6 = 9$$

$$\square + 7 = 13$$

$$\square - 8 = 5$$

$$\square + 6 = 12$$

$$\square + 8 = 16$$

$$\square - 9 = 9$$

$$\square - 8 = 4$$

$$\square - 7 = 5$$

$$\square + 3 = 11$$