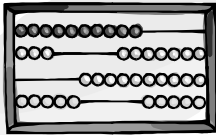


Die Addition
im Zahlenraum

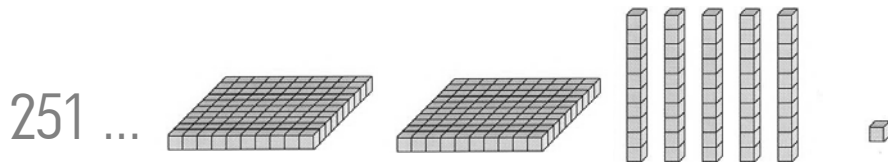
1000

Lösungen



2004 Daniela Windholz

Zahlen darstellen 3

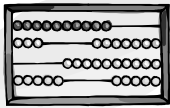


Stelle folgende Zahlen so dar:

$$142 \quad 354$$

$$273 \quad 438$$

$$128 \quad 213$$

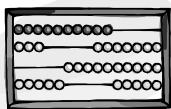


Mit Hunderterzahlen rechnen 1

Rechne so: $200 + 300 = 500$

Denke an: $2 + 3 = 5$

$$20 + 30 = 50$$



Mit Hunderterzahlen rechnen 2

$$300 + 500 = 800$$

$$500 + 200 = 700$$

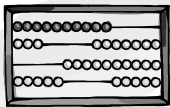
$$100 + 600 = 700$$

$$900 + 100 = 1000$$

$$600 + 300 = 900$$

$$200 + 200 = 400$$

$$700 + 300 = 1000$$



Mit Hunderterzahlen rechnen 3

$$100 + 400 = 500$$

$$600 + 400 = 1000$$

$$400 + 100 = 500$$

$$400 + 600 = 1000$$

$$300 + 500 = 800$$

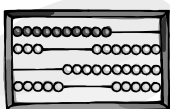
$$200 + 700 = 900$$

$$500 + 300 = 800$$

$$700 + 200 = 900$$

$$800 + 100 = 900$$

$$100 + 800 = 900$$



Rechnen mit Hunderterzahlen 4

+	500	300	400	700	100	600	800
200							

$$200 + 500 = 700$$

$$200 + 700 = 900$$

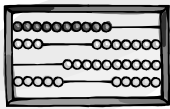
$$200 + 300 = 500$$

$$200 + 100 = 300$$

$$200 + 400 = 600$$

$$200 + 600 = 800$$

$$200 + 800 = 1000$$



Größer, kleiner oder gleich?

$$300 + 200 < 400 + 200$$

$$100 + 300 = 200 + 200$$

$$700 + 200 > 400 + 300$$

$$500 + 500 = 600 + 400$$

$$800 + 100 > 600 + 200$$

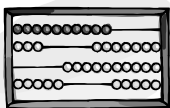
$$300 + 200 > 100 + 300$$

$$400 + 200 = 300 + 300$$

$$200 + 800 > 600 + 100$$

$$500 + 400 > 700 + 100$$

$$400 + 400 < 700 + 300$$



Dreistellige Zahlen erkennen und schreiben

240 →

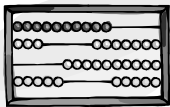
H	Z	E
2	4	0

570 780 320

610 930 440

830 270 190

540 980 360



Zuzählen von reinen Zehnern

$$100 + 30 = 130$$

$$300 + 90 = 390$$

$$500 + 40 = 540$$

$$200 + 50 = 250$$

$$700 + 70 = 770$$

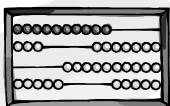
$$800 + 20 = 820$$

$$900 + 90 = 990$$

$$400 + 10 = 410$$

$$600 + 80 = 680$$

$$800 + 60 = 860$$



Zuzählen von Hundertern

$230 + 300 = 530$

$570 + 400 = 970$

$680 + 200 = 880$

$310 + 600 = 910$

$790 + 100 = 890$

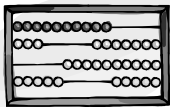
$210 + 500 = 710$

$550 + 200 = 750$

$470 + 400 = 870$

$150 + 200 = 350$

$660 + 100 = 760$



Rechnen mit Hundertern und Zehnern 1

$320 + 430 = \underline{\quad}$

Rechne so:



$320 + 400 = 720$

$720 + 30 = 750$

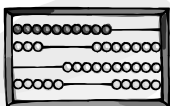
$510 + 430 = 940$

$630 + 120 = 750$

$470 + 220 = 690$

$140 + 730 = 870$

$440 + 220 = 660$



Rechnen mit Hundertern und Zehnern 2

$$430 + 220 = 650$$

$$240 + 350 = 590$$

$$670 + 210 = 880$$

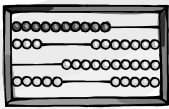
$$510 + 240 = 750$$

$$820 + 130 = 950$$

$$370 + 420 = 790$$

$$170 + 520 = 690$$

$$410 + 360 = 770$$



Den Hunderter überschreiten 1

$$70 + 50 = \underline{\quad}$$

Rechne so:



$$70 + 30 = 100$$

$$100 + 20 = 120$$

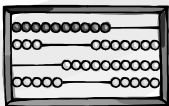
$$80 + 40 = 120$$

$$60 + 50 = 110$$

$$70 + 70 = 140$$

$$40 + 90 = 130$$

$$90 + 30 = 120$$



Den Hunderter überschreiten 2

$$70 + 80 = 150$$

$$20 + 90 = 110$$

$$30 + 80 = 110$$

$$60 + 70 = 130$$

$$60 + 60 = 120$$

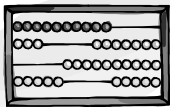
$$70 + 80 = 150$$

$$70 + 70 = 140$$

$$60 + 50 = 110$$

$$90 + 40 = 130$$

$$50 + 80 = 130$$



Den Hunderter überschreiten 3

$$280 + 60 = \underline{\quad}$$

Rechne so:



$$280 + 20 = 300$$

$$300 + 40 = 340$$

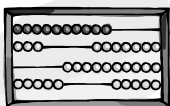
$$370 + 50 = 420$$

$$690 + 30 = 720$$

$$760 + 80 = 840$$

$$580 + 40 = 620$$

$$850 + 70 = 920$$



Den Hunderter überschreiten 4

+	70
290	
870	
750	
460	

+	80
530	
650	
380	
140	

$$290 + 70 = 360$$

$$870 + 70 = 940$$

$$750 + 70 = 820$$

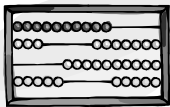
$$460 + 70 = 530$$

$$530 + 80 = 610$$

$$650 + 80 = 730$$

$$380 + 80 = 460$$

$$140 + 80 = 220$$



Rechnen mit gemischten Zahlen 1

$$218 + 300 = 518$$

$$402 + 400 = 802$$

$$524 + 200 = 724$$

$$813 + 100 = 913$$

$$782 + 200 = 982$$

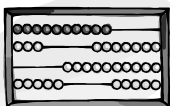
$$218 + 500 = 718$$

$$725 + 100 = 825$$

$$682 + 300 = 982$$

$$376 + 500 = 876$$

$$592 + 400 = 992$$



Rechnen mit gemischten Zahlen 2

$$325 + 610 = 935$$

$$324 + 370 = 694$$

$$659 + 340 = 999$$

$$706 + 250 = 956$$

$$465 + 120 = 585$$

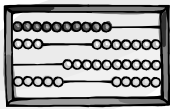
$$149 + 230 = 379$$

$$273 + 710 = 983$$

$$837 + 160 = 997$$

$$118 + 480 = 598$$

$$243 + 440 = 683$$



Rechnen mit gemischten Zahlen 3

$$534 + 242 = 776$$

$$475 + 123 = 598$$

$$751 + 137 = 888$$

$$242 + 421 = 663$$

$$327 + 671 = 998$$

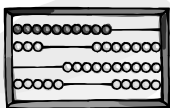
$$567 + 131 = 698$$

$$284 + 415 = 699$$

$$203 + 434 = 637$$

$$663 + 206 = 869$$

$$226 + 542 = 768$$



Überschreiten mit gemischten Zahlen 1

185	269	678	537	755	+	6
-----	-----	-----	-----	-----	---	---

$$185 + 6 = 191$$

$$269 + 6 = 275$$

$$678 + 6 = 684$$

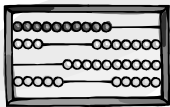
$$537 + 6 = 543$$

$$755 + 6 = 761$$

Rechne so:

$$185 + 5 = 190$$

$$190 + 1 = 191$$



Überschreiten mit gemischten Zahlen 2

267	635	426	318	847	+	15
-----	-----	-----	-----	-----	---	----

$$267 + 15 = 282$$

$$635 + 15 = 650$$

$$426 + 15 = 441$$

$$318 + 15 = 333$$

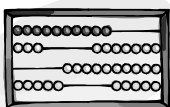
$$847 + 15 = 862$$

Rechne so:

$$267 + 10 = 277$$

$$277 + 3 = 280$$

$$280 + 2 = 282$$



überschreiten mit gemischten Zahlen 3

388	475	566	393	656	+	237
-----	-----	-----	-----	-----	---	-----

$$388 + 237 = 625$$

$$475 + 237 = 712$$

$$566 + 237 = 803$$

$$393 + 237 = 630$$

$$656 + 237 = 893$$

Rechne so:

$$388 + 200 = 588$$

$$588 + 30 = 618$$

$$618 + 7 = 625$$

