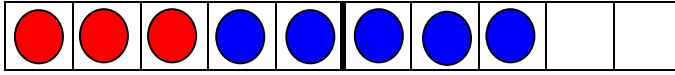


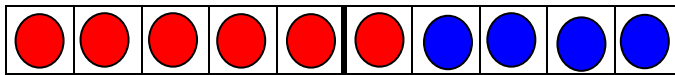




Plusrechnen

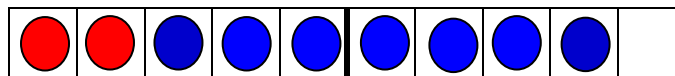


Zahlenraum 10



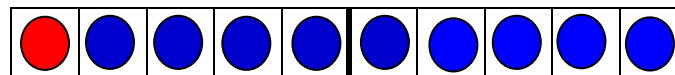


$$2 + 7 = 9$$



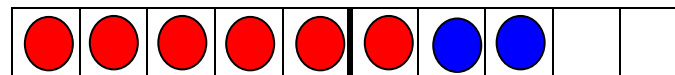


$$1 + 9 = 10$$



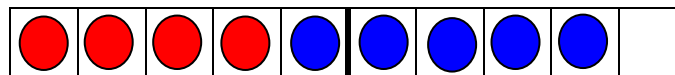

$$3 + 5 = 8$$



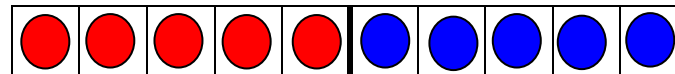

$$6 + 2 = 8$$



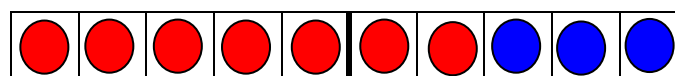

$$6 + 4 = 10$$



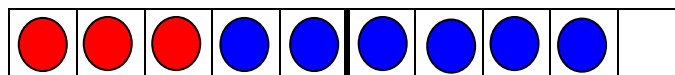


$$7 + 3 = 10$$



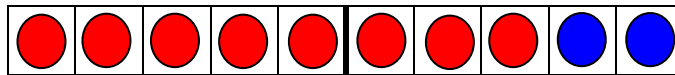

$$8 + 2 = 10$$



$$3 + 6 = 9$$



$$4 + 5 = 9$$



$$5 + 5 = 10$$