





































## Welche Stunde hat geschlagen?

	Punkt eins !	<i>ten o'clock</i>
	Viertel zwei \$	<i>three o'clock</i>
	Viertel drei 4	<i>one o'clock</i>
	halb drei 7	<i>quarter past one</i>
	Punkt drei A	<i>quarter past two</i>
	Viertel vier D	<i>quarter past three</i>
	halb vier G	<i>quarter past four</i>
	dreiviertel vier J	<i>quarter past five</i>
	Viertel fünf T	<i>quarter past seven</i>
	halb fünf g	<i>half past two</i>
	Viertel sechs d	<i>half past three</i>
	dreiviertel sechs j	<i>half past four</i>
	halb sechs g	<i>half past five</i>
	Viertel acht "	<i>half past nine</i>
	dreiviertel sieben Z	<i>quarter to twelve</i>
	halb zehn §	<i>quarter to six</i>
	Punkt zehn ±	<i>quarter to four</i>
	dreiviertel zwölf Ê	<i>quarter to seven</i>

# Lösung

Monika Wegerer 1/2009