






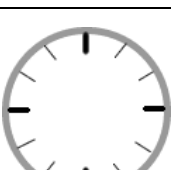
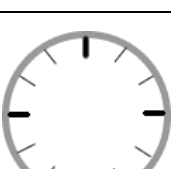


What time is it?



- ✂ Draw the missing clockhands!
- ✂ Put the times into the correct order!

|   |                          |       |
|---|--------------------------|-------|
|    | It's five o'clock.       | _____ |
|    | It's quarter past seven. | _____ |
|    | It's half past eleven.   | _____ |
|  | It's quarter to six.     | _____ |
|  | It's half past one.      | _____ |
|  | It's quarter to three.   | _____ |
|  | It's twelve o'clock.     | _____ |
|  | It's quarter past ten.   | _____ |