

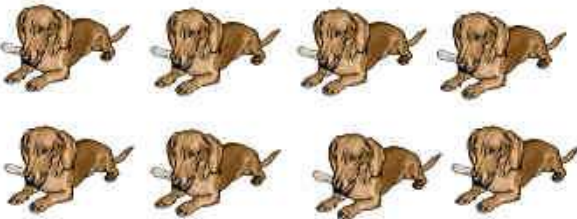
Kreise immer 2 ein! Wie oft geht das?



1 mal 2




\_\_\_\_\_




\_\_\_\_\_



\_\_\_\_\_



\_\_\_\_\_



\_\_\_\_\_



\_\_\_\_\_

Bitte zeichne!

1 mal 2 Häuser .....

4 mal 2 Blätter .....

5mal 2 Blüten .....

3 mal 2 Bäume .....

2 mal 2 Kugeln .....

9 mal 2 Kugeln .....

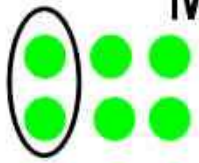
7 mal 2 Birnen .....

6 mal 2 Äpfel .....


8 mal 2 Zwetschken .....

10 mal 2 Kastanien .....


# Mal und Plus gehören zusammen




$$2 + 2 + 2 = \underline{\quad} \quad 3 \cdot 2 = \underline{\quad}$$




\_\_\_\_\_




\_\_\_\_\_



\_\_\_\_\_



\_\_\_\_\_



\_\_\_\_\_



\_\_\_\_\_



\_\_\_\_\_



\_\_\_\_\_



2

$$1 \cdot 2 = \underline{\quad}$$