















Wir treffen uns nach der Schule!

- Zeichne die Zeiger in die Uhren!
- Schreibe die 2. Uhrzeit dazu!

 16.30 Uhr <i>halb 5</i>	 13.15 Uhr	 14.30 Uhr	 14.15 Uhr
 18.45 Uhr	 16.15 Uhr	 18.30 Uhr <i>halb 7</i>	 13.45 Uhr
 15.30 Uhr	 15.15 Uhr	 16.45 Uhr	 17.30 Uhr