


Wie viel fehlt auf 100?

$$\begin{aligned} 33 + \underline{\quad} &= 100 \\ 79 + \underline{\quad} &= 100 \\ 50 + \underline{\quad} &= 100 \\ 47 + \underline{\quad} &= 100 \end{aligned}$$

$$\begin{aligned} 48 + \underline{\quad} &= 100 \\ 26 + \underline{\quad} &= 100 \\ 63 + \underline{\quad} &= 100 \\ 92 + \underline{\quad} &= 100 \end{aligned}$$



$$\begin{aligned} 17 + \underline{\quad} &= 100 \\ 85 + \underline{\quad} &= 100 \\ 29 + \underline{\quad} &= 100 \\ 11 + \underline{\quad} &= 100 \end{aligned}$$

$$\begin{aligned} 68 + \underline{\quad} &= 100 \\ 24 + \underline{\quad} &= 100 \\ 77 + \underline{\quad} &= 100 \\ 52 + \underline{\quad} &= 100 \end{aligned}$$

$$\begin{aligned} 84 + \underline{\quad} &= 100 \\ 64 + \underline{\quad} &= 100 \\ 38 + \underline{\quad} &= 100 \\ 25 + \underline{\quad} &= 100 \end{aligned}$$


$$\begin{aligned} 49 + \underline{\quad} &= 100 \\ 67 + \underline{\quad} &= 100 \\ 46 + \underline{\quad} &= 100 \\ 81 + \underline{\quad} &= 100 \end{aligned}$$

Wie viele Deka fehlen auf ein Kilo?


$$1 \text{ kg} = 100 \text{ dag}$$

$$\begin{aligned} 98 \text{ dag} + \underline{\quad} \text{ dag} &= 1 \text{ kg} \\ 67 \text{ dag} + \underline{\quad} \text{ dag} &= 1 \text{ kg} \\ 24 \text{ dag} + \underline{\quad} \text{ dag} &= 1 \text{ kg} \\ 73 \text{ dag} + \underline{\quad} \text{ dag} &= 1 \text{ kg} \end{aligned}$$

$$\begin{aligned} 33 \text{ dag} + \underline{\quad} \text{ dag} &= 1 \text{ kg} \\ 48 \text{ dag} + \underline{\quad} \text{ dag} &= 1 \text{ kg} \\ 93 \text{ dag} + \underline{\quad} \text{ dag} &= 1 \text{ kg} \\ 56 \text{ dag} + \underline{\quad} \text{ dag} &= 1 \text{ kg} \end{aligned}$$



Wie viele Cent fehlen auf einen Euro?



$$\begin{aligned} 34 \text{ c} + \underline{\quad} \text{ c} &= 1 \text{ €} \\ 78 \text{ c} + \underline{\quad} \text{ c} &= 1 \text{ €} \\ 49 \text{ c} + \underline{\quad} \text{ c} &= 1 \text{ €} \\ 95 \text{ c} + \underline{\quad} \text{ c} &= 1 \text{ €} \end{aligned}$$

$$\begin{aligned} 58 \text{ c} + \underline{\quad} \text{ c} &= 1 \text{ €} \\ 26 \text{ c} + \underline{\quad} \text{ c} &= 1 \text{ €} \\ 66 \text{ c} + \underline{\quad} \text{ c} &= 1 \text{ €} \\ 14 \text{ c} + \underline{\quad} \text{ c} &= 1 \text{ €} \end{aligned}$$