




Wie viele Cent sind es?




Three 1-cent coins are shown inside an oval. A line connects the oval to an empty square box on the right.




One 1-cent coin and two 2-cent coins are shown inside an oval. A line connects the oval to an empty square box on the right.




Five 1-cent coins are shown inside an oval. A line connects the oval to an empty square box on the right.




Two 1-cent coins, one 2-cent coin, and one 1-cent coin are shown inside an oval. A line connects the oval to an empty square box on the right.




Two 1-cent coins and one 2-cent coin are shown inside an oval. A line connects the oval to an empty square box on the right.




Two 1-cent coins, one 2-cent coin, and one 1-cent coin are shown inside an oval. A line connects the oval to an empty square box on the right.




Two 1-cent coins and two 2-cent coins are shown inside an oval. A line connects the oval to an empty square box on the right.




One 1-cent coin, one 2-cent coin, and one 1-cent coin are shown inside an oval. A line connects the oval to an empty square box on the right.




Four 1-cent coins are shown inside an oval. A line connects the oval to an empty square box on the right.



Three 1-cent coins and two 2-cent coins are shown inside an oval. A line connects the oval to an empty square box on the right.



Two 1-cent coins and two 2-cent coins are shown inside an oval. A line connects the oval to an empty square box on the right.



Two 1-cent coins and three 2-cent coins are shown inside an oval. A line connects the oval to an empty square box on the right.

Wie viele Euro sind es?

