



4 in 4



Das macht
Spaß!



Male die Zahlen der 4-er Reihe an!

1	2	3	4	5	6	7	8	9	10
11	12	13	14	15	16	17	18	19	20
21	22	23	24	25	26	27	28	29	30
31	32	33	34	35	36	37	38	39	40

$4 \text{ in } 4 =$

$4 \text{ in } 40 =$

$4 \text{ in } 24 =$

$4 \text{ in } 8 =$

$4 \text{ in } 36 =$

$4 \text{ in } 12 =$

$4 \text{ in } 12 =$

$4 \text{ in } 32 =$

$4 \text{ in } 20 =$

$4 \text{ in } 16 =$

$4 \text{ in } 28 =$

$4 \text{ in } 36 =$

$4 \text{ in } 20 =$

$4 \text{ in } 24 =$

$4 \text{ in } 8 =$

$4 \text{ in } 24 =$

$4 \text{ in } 20 =$

$4 \text{ in } 15 =$

$4 \text{ in } 28 =$

$4 \text{ in } 16 =$

$4 \text{ in } 32 =$

$4 \text{ in } 32 =$

$4 \text{ in } 12 =$

$4 \text{ in } 4 =$

$4 \text{ in } 36 =$


$4 \text{ in } 8 =$

$4 \text{ in } 28 =$

$4 \text{ in } 40 =$

$4 \text{ in } 4 =$

$4 \text{ in } 16 =$



Kreise die Punkte ein und rechne das „in-“
Sätzchen aus!

● ● ● ● 4 in 4 =

● ● ● ● ● ● ● ● 4 in 8 =

● ● ● ● ● ● ● ● 4 in 12 =
● ● ● ●

● ● ● ● ● ● ● ● ● ● ● ● ● ● ● ● 4 in 16 =

● ● ● ● ● ● ● ● ● ● ● ● ● ● ● ● ● 4 in 20 =
● ● ● ●

● ● ● ● ● ● ● ● ● ● ● ● ● ● ● ● ● ● 4 in 24 =
● ● ● ● ● ● ● ●

● ● ● ● ● ● ● ● ● ● ● ● ● ● ● ● ● ● 4 in 28 =
● ● ● ● ● ● ● ● ● ● ● ● ● ●

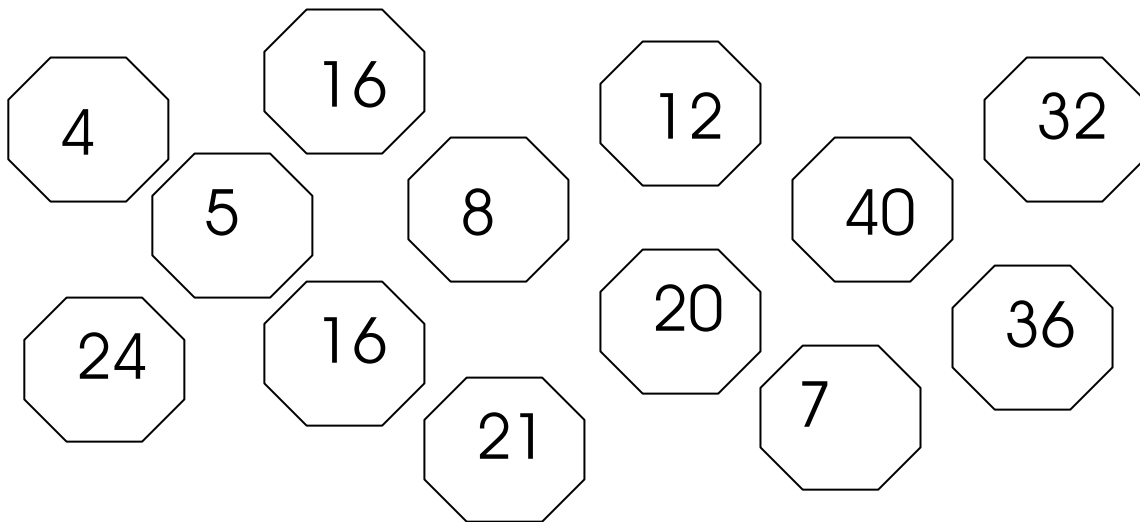
● ● ● ● ● ● ● ● ● ● ● ● ● ● ● ● ● ● 4 in 32 =
● ● ● ● ● ● ● ● ● ● ● ● ● ● ● ● ● ●

● ● ● ● ● ● ● ● ● ● ● ● ● ● ● ● ● ● 4 in 36 =
● ● ● ● ● ● ● ● ● ● ● ● ● ● ● ● ● ●
● ● ● ●

● ● ● ● ● ● ● ● ● ● ● ● ● ● ● ● ● ● 4 in 40 =
● ● ● ● ● ● ● ● ● ● ● ● ● ● ● ● ● ●
● ● ● ● ● ● ● ●



Male die Zahlen der 4er Reihe an!



4 in 4 =
4 in 8 =
4 in 12 =
4 in 16 =
4 in 20 =
4 in 24 =
4 in 28 =
4 in 32 =
4 in 36 =
4 in 40 =



4 in 24 =
4 in 36 =
4 in 8 =
4 in 28 =
4 in 16 =
4 in 4 =
4 in 20 =
4 in 40 =
4 in 12 =
4 in 24 =

Verbinde Rechnung und Ergebnis!


4 in 20=
4 in 4 =
4 in 24=
4 in 8=
4 in 16=
4 in 24=
4 in 12=
4 in 40=
4 in 28=
4 in 32=

6
9
8
1
10
2
5
7
4
3

4 in 24=
4 in 8 =
4 in 28=
4 in 4=
4 in 40=
4 in 32=
4 in 12=
4 in 20=
4 in 16=
4 in 36=

3
9
8
10
1
2
5
4
7
6

Schreibe die Zahlen der 4er- Reihe!



Male das Kästchen mit dem richtigen Ergebnis an!

4 in 20 =	2	5	6
4 in 12 =	3	2	1
4 in 40 =	9	10	8
4 in 32 =	6	7	8
4 in 24 =	5	6	7
4 in 8 =	2	3	4
4 in 36 =	8	9	10
4 in 28 =	5	6	7
4 in 16 =	3	4	5
4 in 4 =	1	2	3

4 in 36 =	8	9	12
4 in 4 =	1	2	5
4 in 32 =	9	8	10
4 in 28 =	6	5	7
4 in 40 =	9	10	11
4 in 16 =	4	5	6
4 in 24 =	5	6	7
4 in 20 =	3	4	5
4 in 8 =	1	2	3
4 in 12 =	3	2	1




Kontrolliere die Rechnungen!

r = richtig

f = falsch

4 in 12 = 4		
4 in 20 = 3		
4 in 40 = 10		
4 in 32 = 7		
4 in 24 = 5		
4 in 8 = 2		
4 in 36 = 8		
4 in 28 = 6		
4 in 16 = 4		
4 in 4 = 1		

4 in 28 = 7		
4 in 4 = 2		
4 in 16 = 5		
4 in 20 = 9		
4 in 32 = 8		
4 in 8 = 3		
4 in 36 = 9		
4 in 24 = 6		
4 in 40 = 9		
4 in 12 = 3		



Rechnungen einmal anders!

$4 \text{ in } \square = 10$

$4 \text{ in } \square = 8$

$4 \text{ in } \square = 4$

$4 \text{ in } \square = 1$

$4 \text{ in } \square = 3$

$4 \text{ in } \square = 9$

$4 \text{ in } \square = 6$

$4 \text{ in } \square = 2$

$4 \text{ in } \square = 5$

$4 \text{ in } \square = 7$

$4 \text{ in } \square = 1$

$4 \text{ in } \square = 10$

$4 \text{ in } \square = 2$

$4 \text{ in } \square = 9$

$4 \text{ in } \square = 3$


$4 \text{ in } \square = 8$

$4 \text{ in } \square = 4$

$4 \text{ in } \square = 6$

$4 \text{ in } \square = 5$

$4 \text{ in } \square = 7$



Rechengeschichten



1. Peter hat 40 €. Ein Heft kostet 4 €.
Wie viele Hefte kann Peter kaufen?

R: _____

A: _____

2. Eine Tafel Schokolade kostet 4€.

Wie viele Tafeln kann Michi kaufen, wenn er 28€ hat?

R: _____

A: _____

3. Lilli hat 36€ und will sich Bücher kaufen. Ein Buch kostet 4€.

Wie viele Bücher kann sich Lilli kaufen?

R: _____

A: _____