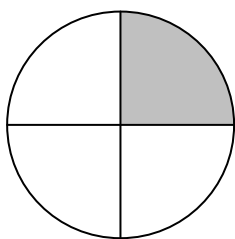
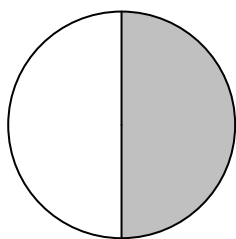


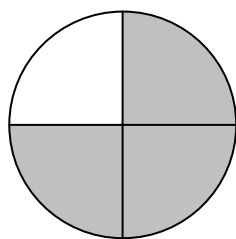
# Beschrifte die Bruchteile richtig!



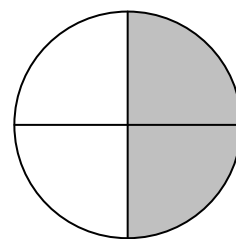
\_\_\_\_\_



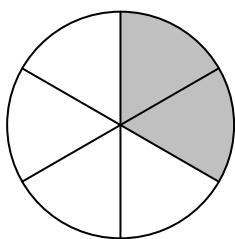
\_\_\_\_\_



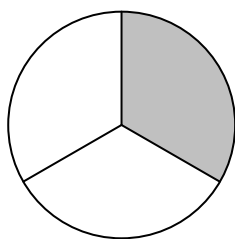
\_\_\_\_\_



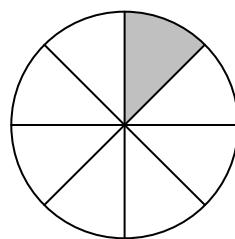
\_\_\_\_\_



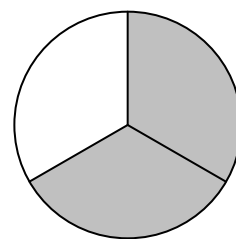
\_\_\_\_\_



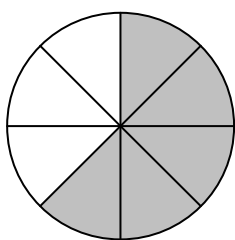
\_\_\_\_\_



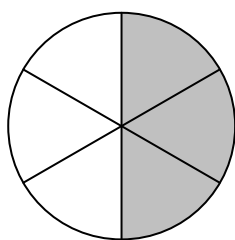
\_\_\_\_\_



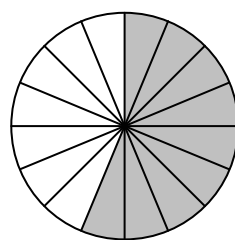
\_\_\_\_\_



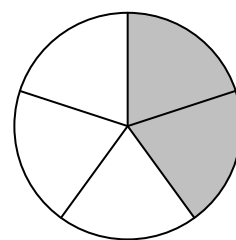
\_\_\_\_\_




\_\_\_\_\_



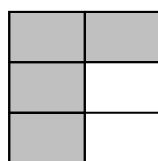
\_\_\_\_\_



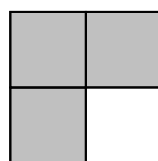
\_\_\_\_\_



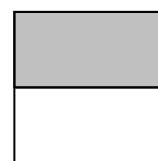
\_\_\_\_\_



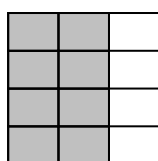
\_\_\_\_\_



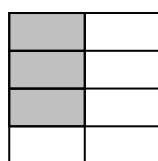
\_\_\_\_\_



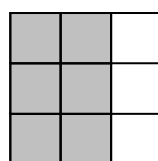
\_\_\_\_\_



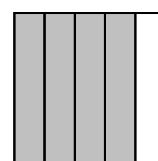
\_\_\_\_\_



\_\_\_\_\_

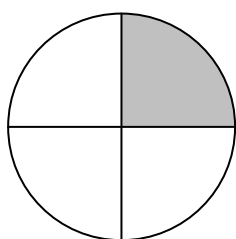


\_\_\_\_\_



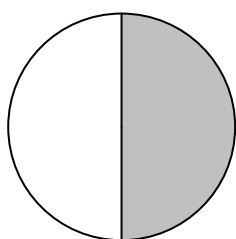
\_\_\_\_\_

## Beschrifte die Bruchteile richtig!



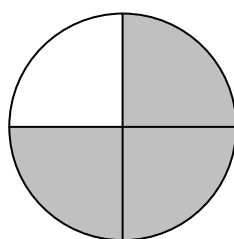
$\frac{1}{4}$

---



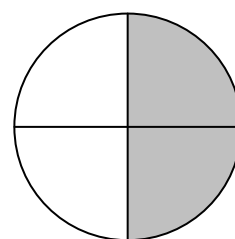
$\frac{1}{2}$

---



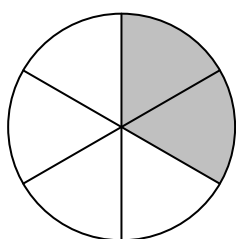
$\frac{3}{4}$

---



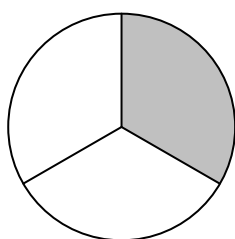
$\frac{2}{4}$

---



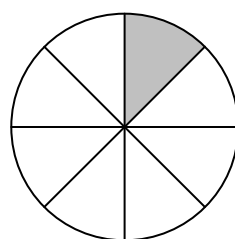
$\frac{2}{6}$

---



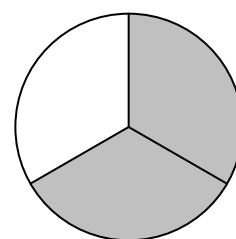
$\frac{1}{3}$

---



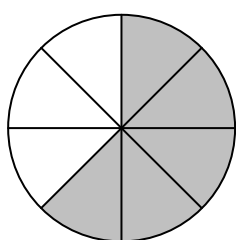
$\frac{1}{8}$

---



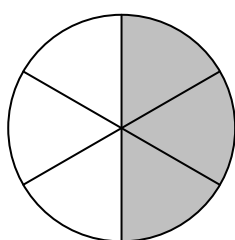
$\frac{2}{3}$

---



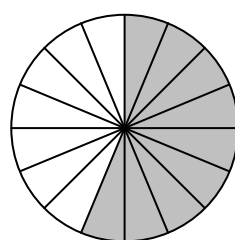
$\frac{5}{8}$

---



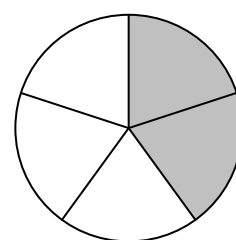
$\frac{3}{6}$

---



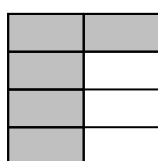
$\frac{9}{16}$

---



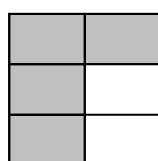
$\frac{2}{5}$

---



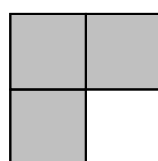
$\frac{5}{8}$

---



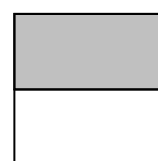
$\frac{5}{6}$

---



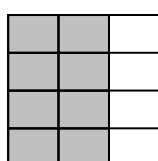
$\frac{3}{4}$

---




$\frac{1}{2}$

---



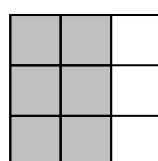
$\frac{8}{12}$

---



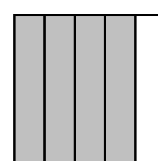
$\frac{3}{8}$

---



$\frac{6}{9}$

---



$\frac{4}{5}$

---