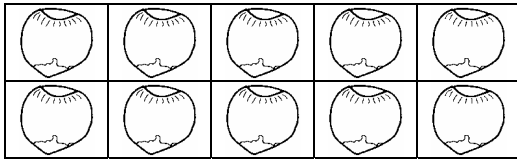




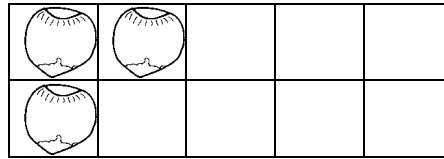
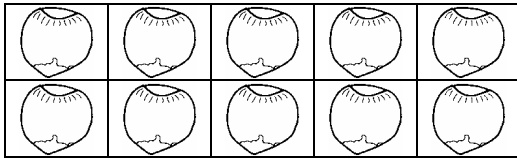
Bildquelle: Verlag an der Ruhr

Wie viele Nüsse fehlen
auf 20?

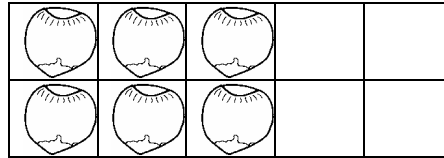
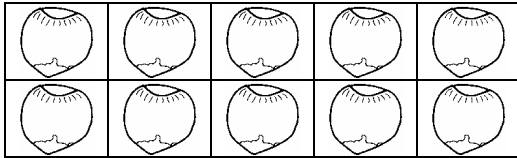
Male die Nüsse braun an!



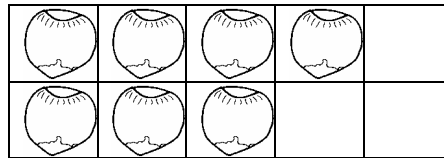
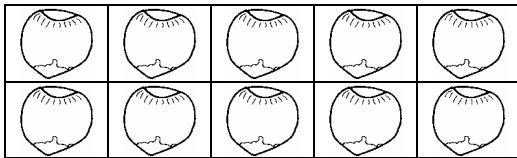
$$12 + \underline{\quad} = 20$$



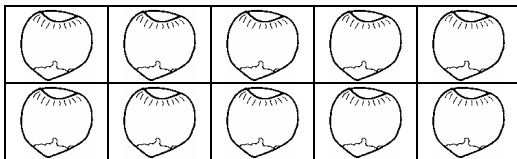
$$13 + \underline{\quad} = 20$$



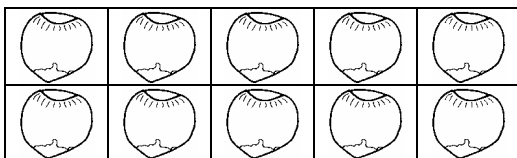
$$16 + \underline{\quad} = 20$$



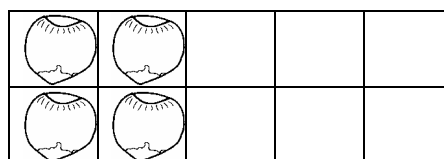
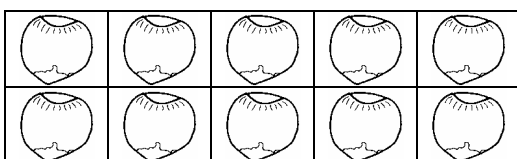
$$17 + \underline{\quad} = 20$$



$$11 + \underline{\quad} = 20$$



$$10 + \underline{\quad} = 20$$



$$14 + \underline{\quad} = 20$$

Du bist
spitze!

