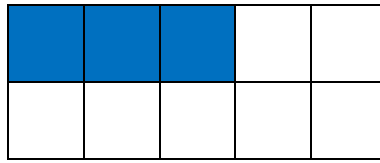
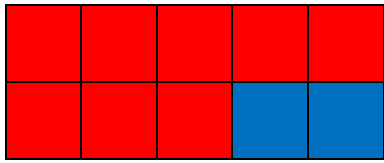
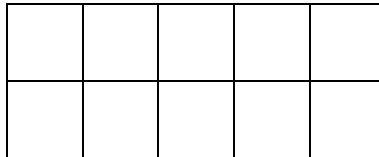
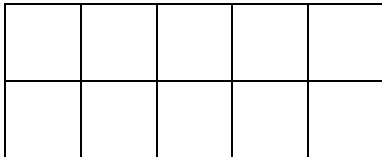


Name: _____

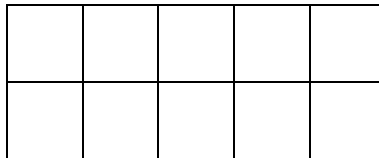
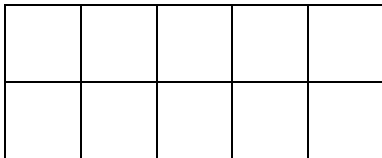
Über den Zehner



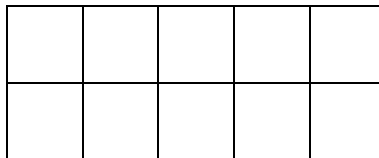
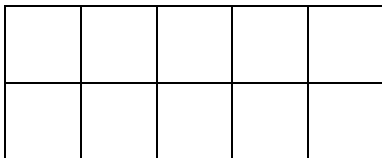
$$8 + 5 = \underline{\quad}$$



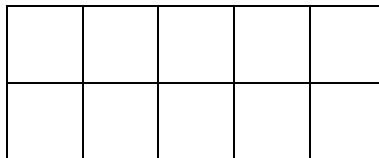
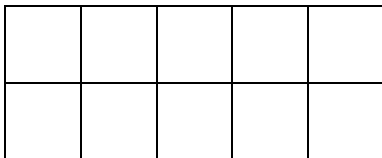
$$6 + 5 = \underline{\quad}$$



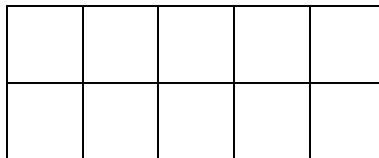
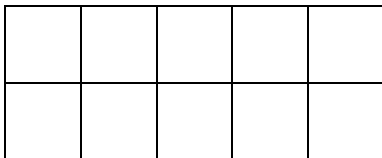
$$7 + 4 = \underline{\quad}$$



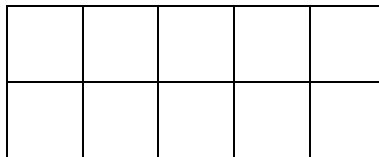
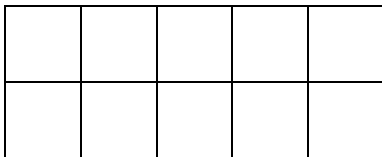
$$9 + 6 = \underline{\quad}$$



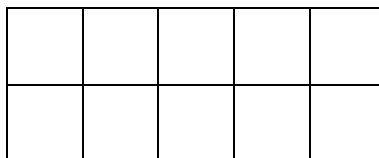
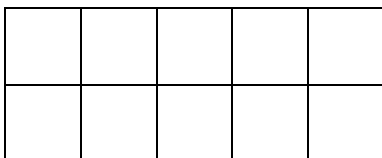
$$7 + 8 = \underline{\quad}$$



$$6 + 6 = \underline{\quad}$$



$$9 + 4 = \underline{\quad}$$



$$3 + 9 = \underline{\quad}$$