



Name :

Brummi rechnet

$3 + \underline{\quad} = 10$

$4 + \underline{\quad} = 10$

$10 + \underline{\quad} = 10$

$8 + \underline{\quad} = 10$

$5 + \underline{\quad} = 10$

$1 + \underline{\quad} = 10$

$0 + \underline{\quad} = 10$

$2 + \underline{\quad} = 10$

$8 + \underline{\quad} = 10$

$9 + \underline{\quad} = 10$


$3 + \underline{\quad} = 10$

$7 + \underline{\quad} = 10$

$4 + \underline{\quad} = 10$

$6 + \underline{\quad} = 10$


$0 + \underline{\quad} = 10$





Name :

Gigi rechnet mit Geld



① Rechne mit Euro !

$$8 \text{ €} - 5 \text{ €} = \underline{\quad} \text{ €} \quad | \quad 10 \text{ €} - 4 \text{ €} = \underline{\quad} \text{ €} \quad | \quad 6 \text{ €} + 6 \text{ €} = \underline{\quad} \text{ €}$$

$$7 \text{ €} + 2 \text{ €} = \underline{\quad} \text{ €} \quad | \quad 3 \text{ €} + 5 \text{ €} = \underline{\quad} \text{ €} \quad | \quad 9 \text{ €} + 1 \text{ €} = \underline{\quad} \text{ €}$$

$$4 \text{ €} + 5 \text{ €} + 1 \text{ €} = \underline{\quad} \text{ €}$$

$$9 \text{ €} + 1 \text{ €} + 2 \text{ €} = \underline{\quad} \square$$


$$7 \text{ €} + 2 \text{ €} - 4 \text{ €} = \underline{\quad} \text{ €}$$

$$6 \text{ €} + 1 \text{ €} - 2 \text{ €} = \underline{\quad} \square$$


$$5 \text{ €} + 3 \text{ €} - 7 \text{ €} = \underline{\quad} \text{ €}$$

$$7 \text{ €} + 2 \text{ €} - 9 \text{ €} = \underline{\quad} \text{ €}$$


② Wie viel siehst du ?




<input type="text"/>	€
----------------------	---



<input type="text"/>	€
----------------------	---




<input type="text"/>	<input type="text"/>
----------------------	----------------------




<input type="text"/>	<input type="text"/>
----------------------	----------------------

③ Zeichne dazu !



5	€
---	---



7	€
---	---



2	€
---	---



10	€
----	---